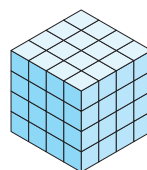


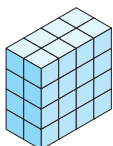
**NO110 Fractions de cube**

Le grand cube ci-contre représente l'unité.

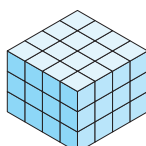
Quelle fraction irréductible de ce grand cube est représentée par chacun de ces solides ?



a)



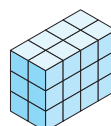
b)




c)




d)



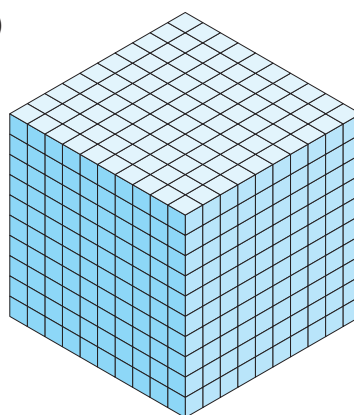
e)



f)



g)



h)

