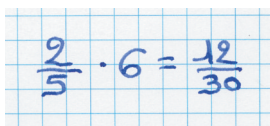


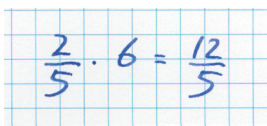
NO155 Conflit

Belle, Abel et Label proposent trois manières d'effectuer la multiplication $\frac{2}{5} \cdot 6$.

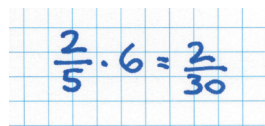
Belle


$$\frac{2}{5} \cdot 6 = \frac{12}{30}$$

Abel


$$\frac{2}{5} \cdot 6 = \frac{12}{5}$$

Label


$$\frac{2}{5} \cdot 6 = \frac{2}{30}$$

Qui a raison ?