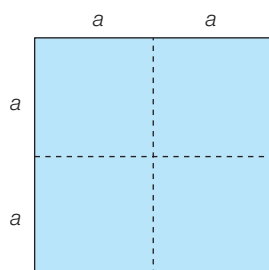
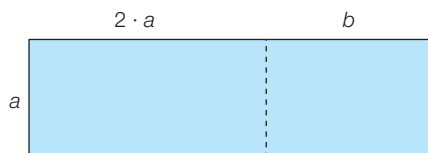


FA152 Quelle expression ?

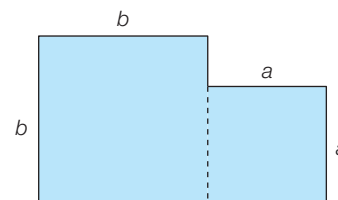
A quelle longueur, à quelle aire ou à quel volume correspond chacune de ces expressions littérales ?



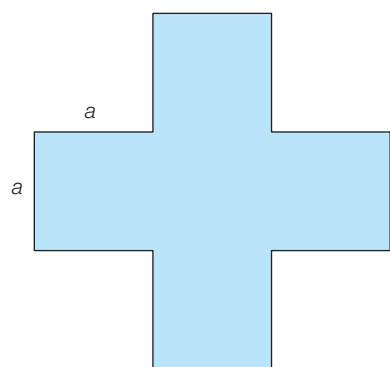
A



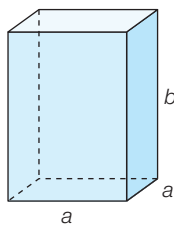
B



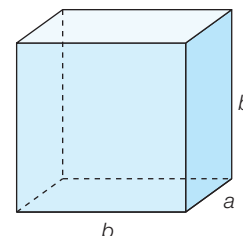
C



D



E



F

a) $6 \cdot a + 2 \cdot b$ _____

k) $a \cdot a \cdot b$ _____

b) $4 \cdot a + 4 \cdot a + 4 \cdot b$ _____

l) $(a + a)^2$ _____

c) $4 \cdot a^2$ _____

m) $a^2 \cdot b$ _____

d) $a \cdot (2 \cdot a + b)$ _____

n) $(2 \cdot a)^2$ _____

e) $4 \cdot b + 2 \cdot a$ _____

o) $a \cdot b^2$ _____

f) $12 \cdot a$ _____

p) $a^2 + b^2$ _____

g) $4 \cdot a + 8 \cdot b$ _____

q) $2 \cdot a^2 + 4 \cdot a \cdot b$ _____

h) $2 \cdot a + 2 \cdot a + 2 \cdot a + 2 \cdot a$ _____

r) $8 \cdot a$ _____

i) $2 \cdot a \cdot a + b \cdot a$ _____

s) $2 \cdot a^2 + a \cdot b$ _____

j) $2 \cdot a + 2 \cdot 2 \cdot a + 2 \cdot b$ _____

t) $5 \cdot a^2$ _____