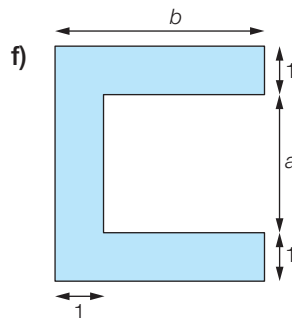
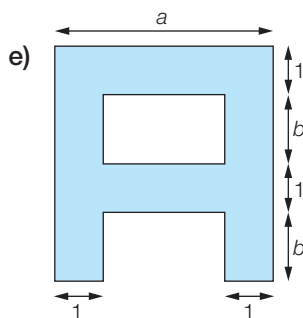
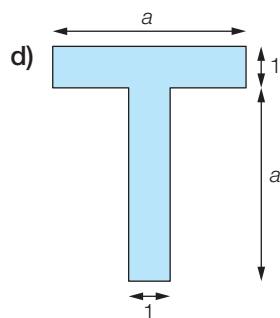
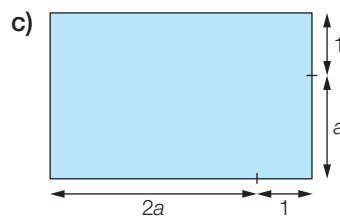
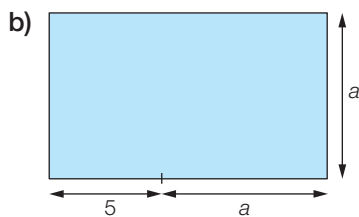
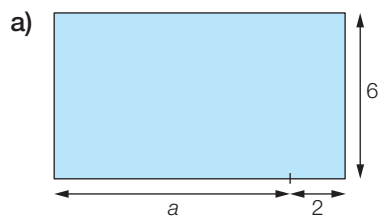


FA171 Aires en tout genre

1. Exprime le périmètre et l'aire des figures suivantes.



2. Calcule le périmètre et l'aire des figures **c)**, **d)** et **e)** si $a = 7$ et $b = 3$.