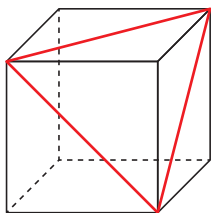


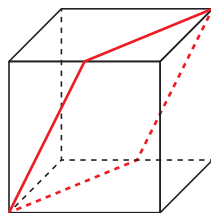
ES69 Figure plane dans le cube

A



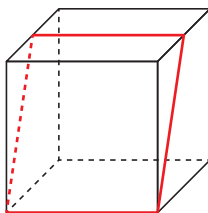
*un triangle
équilateral*

B



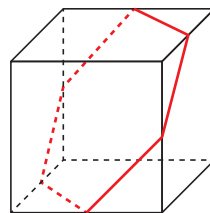
un losange

C



un rectangle

D



*un hexagone
régulier*