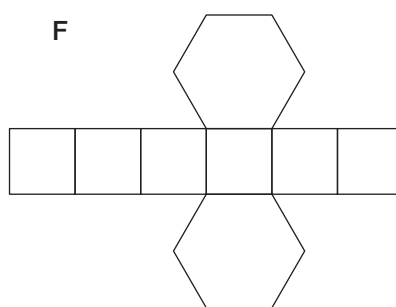
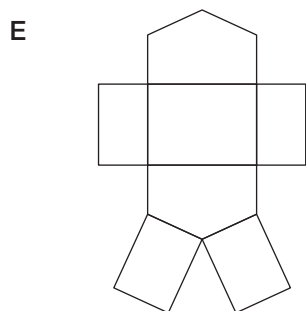
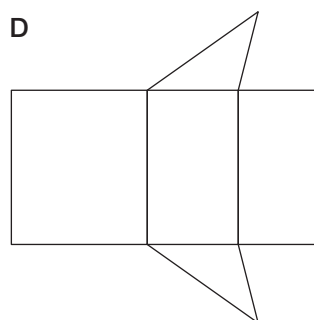
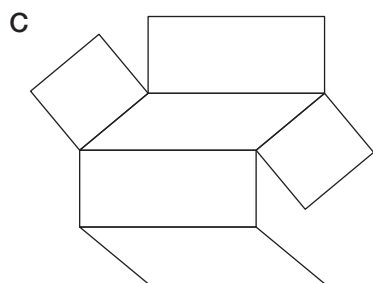
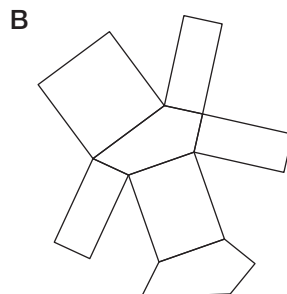



**ES54 Quels solides ?**

Les développements ci-dessous sont tous corrects.

Quel solide chacun d'eux permet-il de construire ?



**A:** \_\_\_\_\_

**B:** \_\_\_\_\_

**C:** \_\_\_\_\_

**D:** \_\_\_\_\_

**E:** \_\_\_\_\_

**F:** \_\_\_\_\_