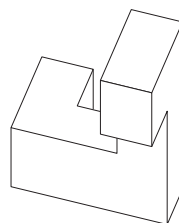
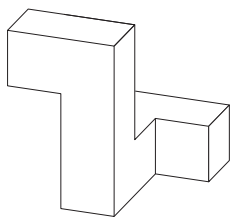
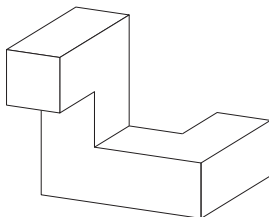
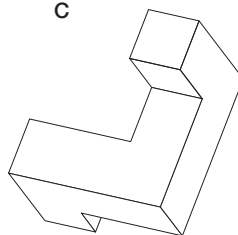


**ES58 Heptacubes**

Le solide ci-contre est composé de sept petits cubes.

Laquelle (ou lesquelles) des quatre vues suivantes représente(nt) ce solide ?

**A****B****C****D**