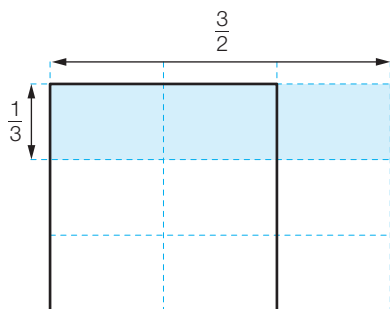
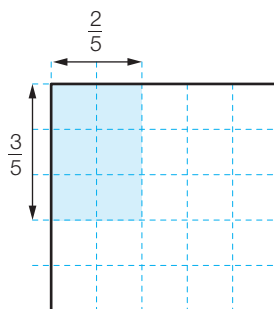


NO29 Avec des rectangles

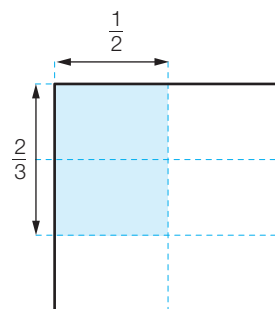
a)



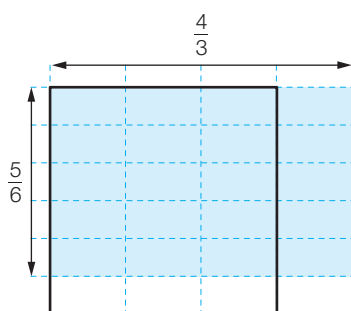
$$\frac{1}{3} \cdot \frac{3}{2} = \frac{1}{2}$$



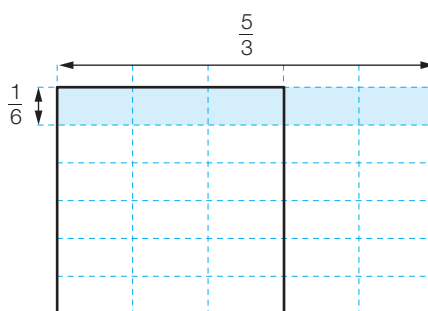
$$\frac{3}{5} \cdot \frac{2}{5} = \frac{6}{25}$$



$$\frac{2}{3} \cdot \frac{1}{2} = \frac{1}{3}$$



$$\frac{5}{6} \cdot \frac{4}{3} = \frac{10}{9}$$



$$\frac{1}{6} \cdot \frac{5}{3} = \frac{5}{18}$$

b) Pour multiplier des fractions, on multiplie leurs numérateurs entre eux et leurs dénominateurs entre eux.