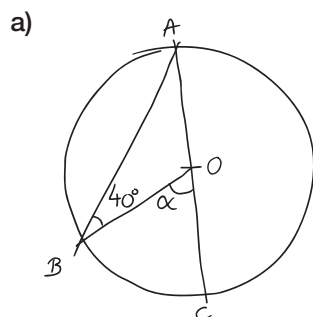


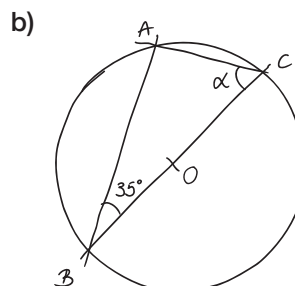
ES25 Cercles et polygones

Pour chaque figure, les points A , B , C et D appartiennent au cercle de centre O .

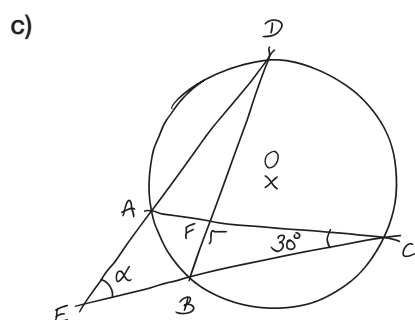
Détermine la valeur de l'angle α .



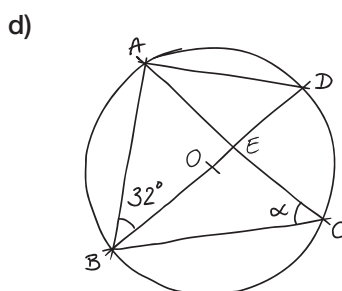
$$\alpha = \underline{\hspace{2cm}}$$



$$\alpha = \underline{\hspace{2cm}}$$



$$\alpha = \underline{\hspace{2cm}}$$



$$\alpha = \underline{\hspace{2cm}}$$