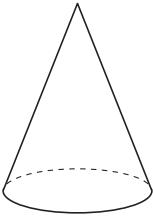
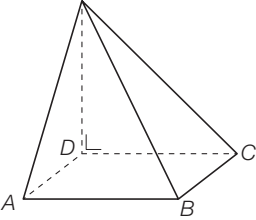
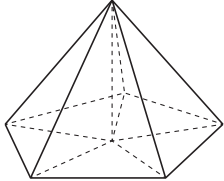
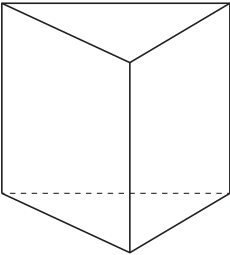
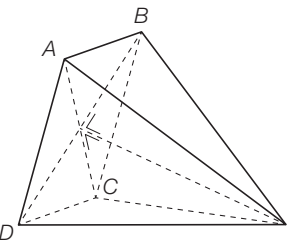
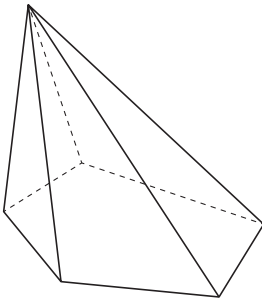
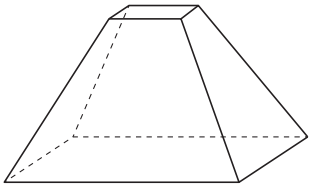
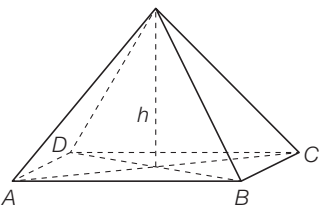
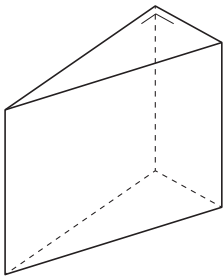
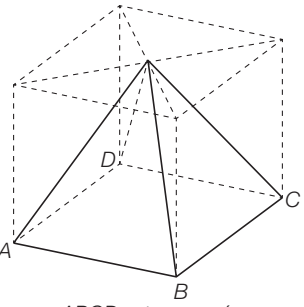
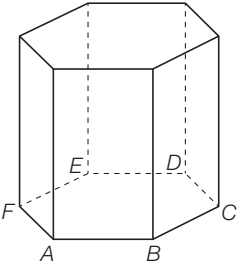
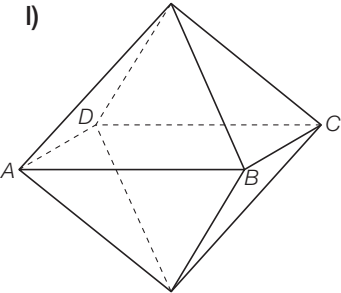


ES65 Pyramides et autres solides

Parmi les figures suivantes, lesquelles représentent des pyramides ?

Précise chaque fois si elles sont régulières ou non.

<p>a)</p> 	<p>b)</p>  <p>$ABCD$ est un carré</p>	<p>c)</p> 
<p>d)</p> 	<p>e)</p>  <p>$ABCD$ est un carré</p>	<p>f)</p> 
<p>g)</p> 	<p>h)</p>  <p>$ABCD$ est un rectangle</p>	<p>i)</p> 
<p>j)</p>  <p>$ABCD$ est un carré</p>	<p>k)</p>  <p>$ABCDEF$ est un hexagone régulier</p>	<p>l)</p>  <p>$ABCD$ est un carré</p>