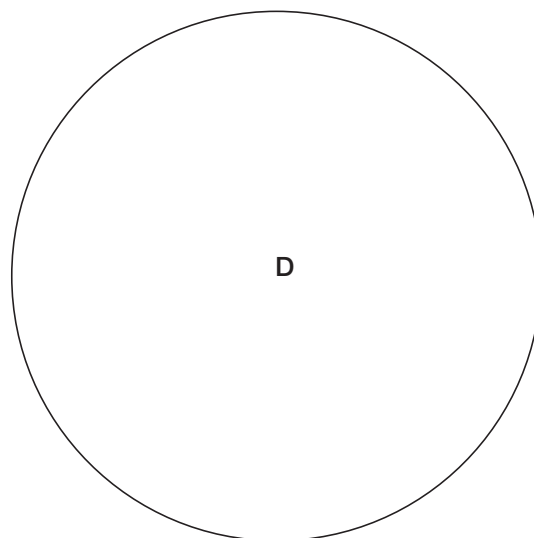
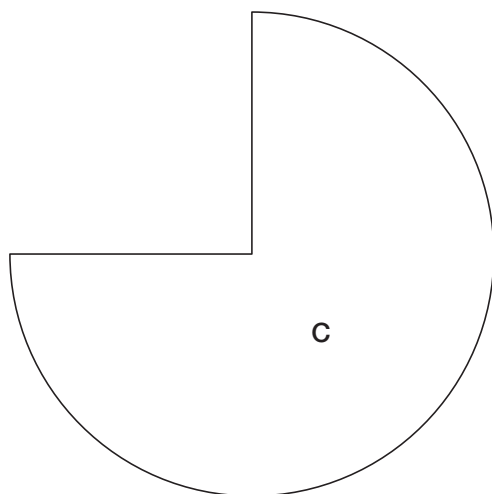
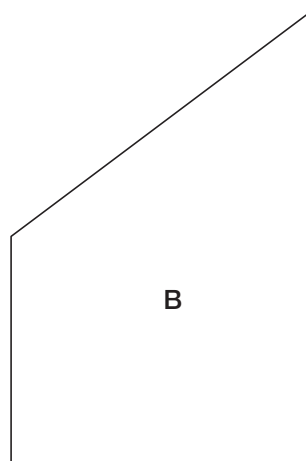
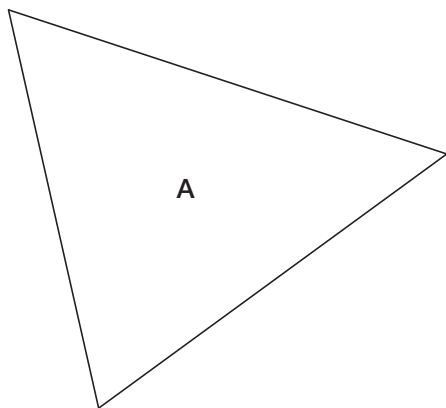


**GM1 Divers périmètres et aires**

Prends les mesures nécessaires et calcule le périmètre et l'aire des figures suivantes :



$p_A = \underline{\hspace{2cm}}$

$A_A = \underline{\hspace{2cm}}$

$p_B = \underline{\hspace{2cm}}$

$A_B = \underline{\hspace{2cm}}$

$p_C = \underline{\hspace{2cm}}$

$A_C = \underline{\hspace{2cm}}$

$p_D = \underline{\hspace{2cm}}$

$A_D = \underline{\hspace{2cm}}$