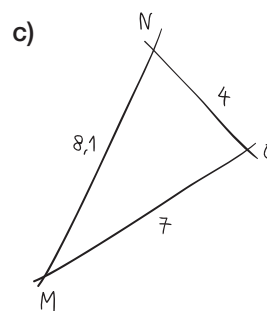
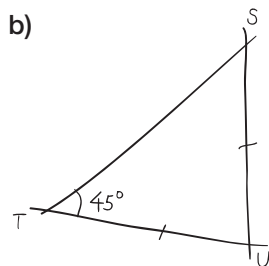
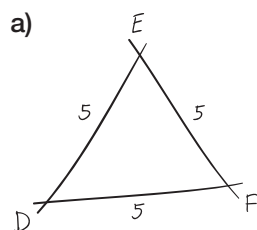


GM24 Le sont-ils ?

Les triangles ci-dessous sont-ils rectangles ?



Mesures exprimées en centimètres