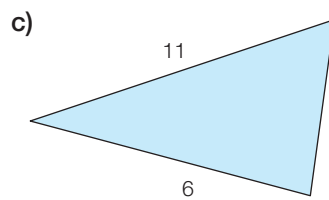
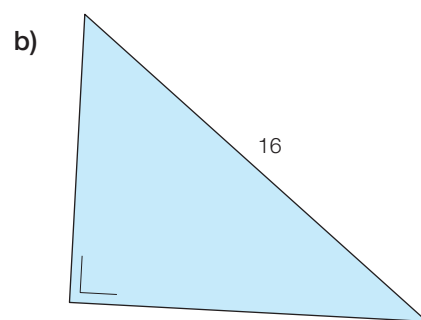
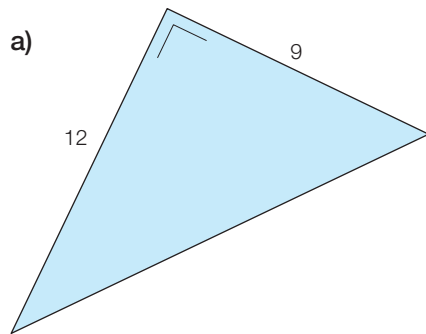


GM29 Si tu peux!

Calcule, si possible, la (ou les) mesure(s) manquante(s) des côtés de chaque triangle.



Mesures exprimées en centimètres