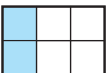
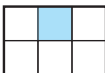
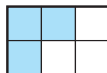






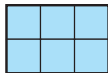
# NO217 Dans quel dessin ?

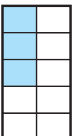
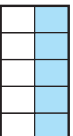

Par exemple :





a)  +  =   $\frac{3}{6} = \frac{1}{2}$

d)  -  =   $\frac{3}{20}$

b)  -  =   $\frac{1}{4}$

e)  +  =   $\frac{7}{6}$

c)  +  =   $\frac{18}{10} = \frac{9}{5}$

f)  +  +  =   $\frac{13}{12}$