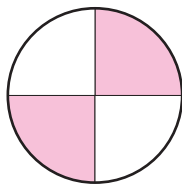


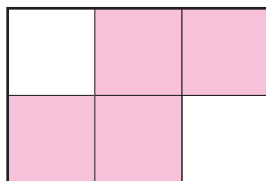
NO168 Fractions dessinées

Pour chacune des figures ci-dessous, indique la fraction coloriée.

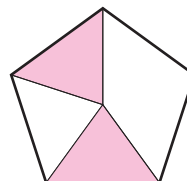
a)




b)



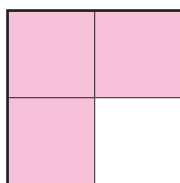
c)




d)



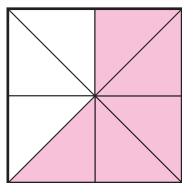
+



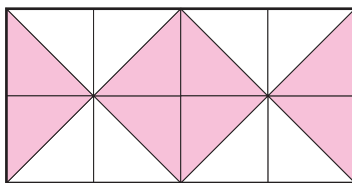
e)



f)



g)



h)

