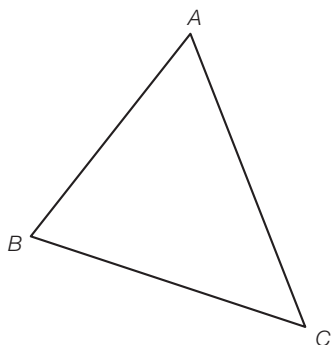


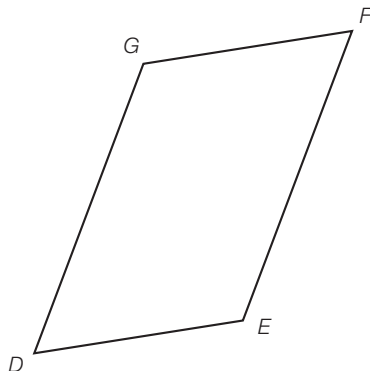
**ES91 Reproductions**

Quels éléments faut-il mesurer pour reconstruire exactement ces figures ?


a) Triangle quelconque



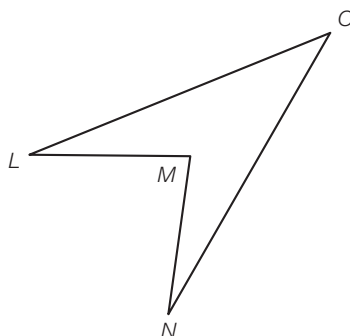
b) Parallélogramme



c) Rectangle



d) Fer de lance



Compare ta (ou tes) proposition(s) avec celle(s) de tes camarades.