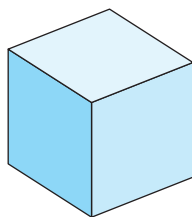


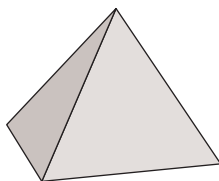
ES98 Solides à nommer

Complète le tableau ci-dessous, en t'aidant de l'exemple.

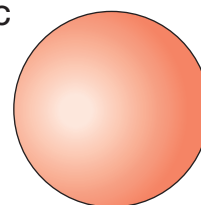
A



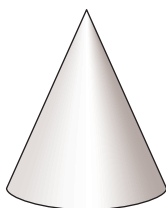
B



C



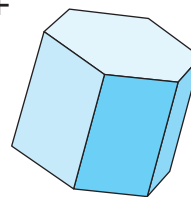
D



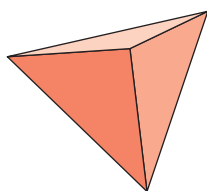
E



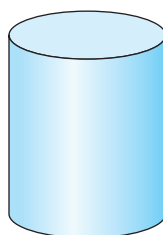
F



G



H



Solides	Lettres								
	A	B	C	D	E	F	G	H	
Cône									
Cube									
Cylindre									
Parallélépipède rectangle					X				
Prisme droit					X				
Pyramide									
Sphère									
Tétraèdre									